




*Noseem simplex*




*Noseem quadrum*




*Noseem elegantium*




*Noseem conundrum*




*Noseem curlicum*



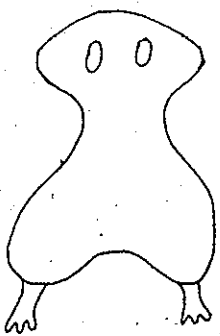
*Noseem dustum*



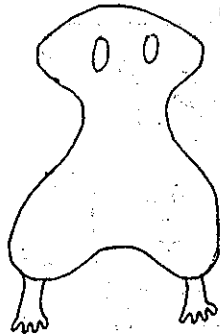
*Noseem rotundum*



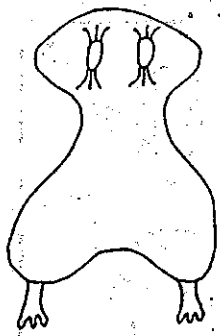
*Noseem hairyum*



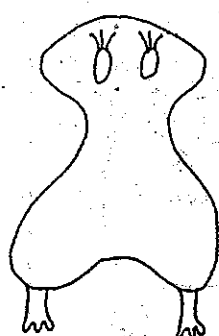
*Weebastic simplex*



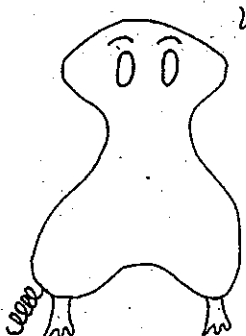
*Weebastic quadrum*



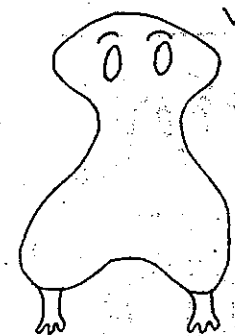
*Weebastic elegantium*




*Weebastic conundrum*



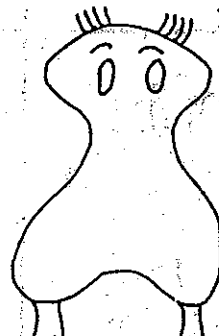
*Weebastic curlicum*



*Weebastic dustum*



*Weebastic rotundum*



*Weebastic hairyum*



## Interpreting Graphics - Taxonomy

Answer true or false to the following statements.

1. \_\_\_\_\_ Dogs belong to the order Felidae.
2. \_\_\_\_\_ A fox belongs to the phylum Arthropoda.
3. \_\_\_\_\_ Snakes belong to the phylum Reptilia.
4. \_\_\_\_\_ Lions belong to the class mammalia
5. \_\_\_\_\_ All arthropods belong to the Class Insecta
6. \_\_\_\_\_ All rodents belong to the phylum chordata.
7. \_\_\_\_\_ All amphibians belong to the class reptilia.
8. \_\_\_\_\_ All primates are mammals.
9. \_\_\_\_\_ The class mammalia includes dogs, cats and rats.
10. \_\_\_\_\_ A lion belongs to the genus Felis.
11. \_\_\_\_\_ All mammals are primates.
12. \_\_\_\_\_ Insects and lobsters are arthropods.

In each set, circle the pair that is most closely related.

13. snakes & crocodiles | snakes & frogs
14. rats & cats | cats & dogs
15. insects & lobsters | insects & birds
16. lions & tigers | lions & cougars
17. foxes & rats | foxes & dogs
18. cats & dogs | cats & lions

17. List (use genus and species name) all the animals pictured that belong in the Felidae family.

